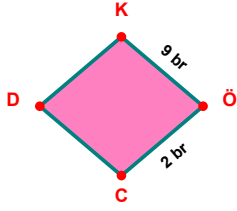
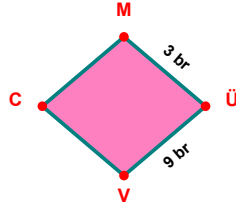


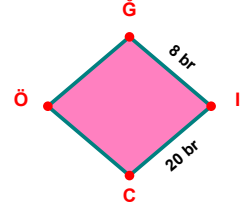
SORU: Aşağıdaki şekillerde verilen, kenar uzunlukları farklarını bulunuz.



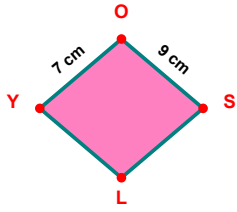
$$|KÖ| - |ÖC| = \dots\dots$$



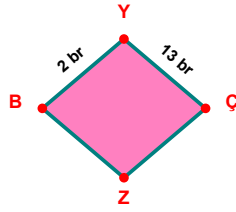
$$|ÜV| - |MÜ| = \dots\dots$$



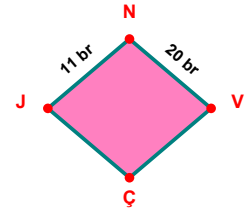
$$|İC| - |Ğİ| = \dots\dots$$



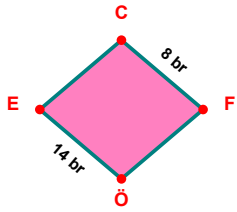
$$|OS| - |YO| = \dots\dots$$



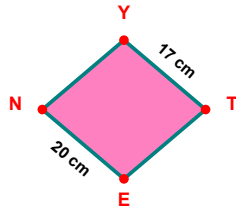
$$|YÇ| - |BY| = \dots\dots$$



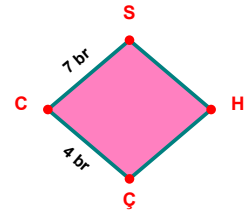
$$|NV| - |JN| = \dots\dots$$



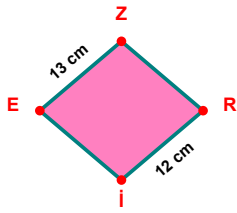
$$|ÖE| - |CF| = \dots\dots$$



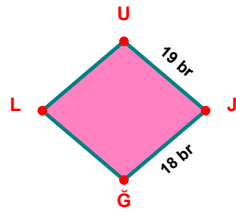
$$|EN| - |YT| = \dots\dots$$



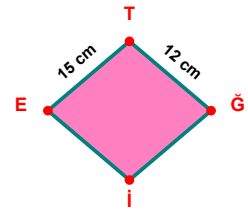
$$|CS| - |ÇC| = \dots\dots$$



$$|EZ| - |Rİ| = \dots\dots$$

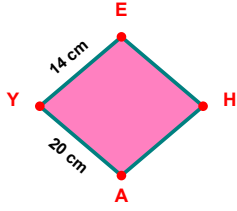


$$|UJ| - |JĞ| = \dots\dots$$

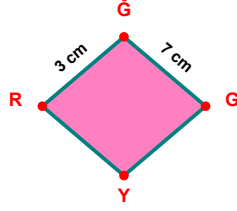


$$|ET| - |TĞ| = \dots\dots$$

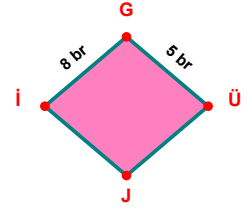
SORU: Aşağıdaki şekillerde verilen, kenar uzunlukları farklarını bulunuz.



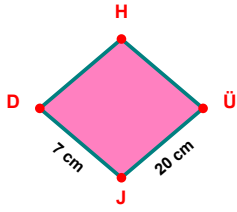
$|AY| - |YE| = \dots\dots\dots$



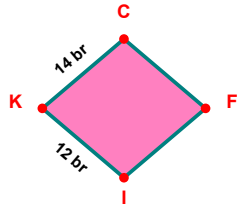
$|\ddot{G}G| - |R\ddot{G}| = \dots\dots\dots$



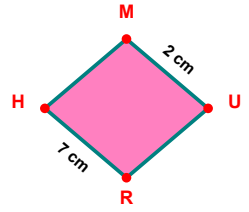
$|İG| - |GÜ| = \dots\dots\dots$



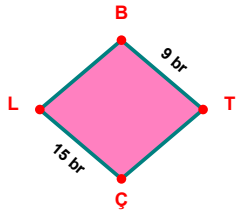
$|\ddot{U}J| - |JD| = \dots\dots\dots$



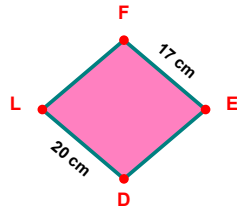
$|KC| - |İK| = \dots\dots\dots$



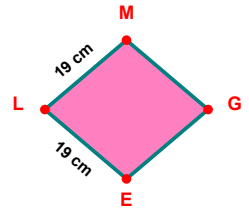
$|RH| - |MU| = \dots\dots\dots$



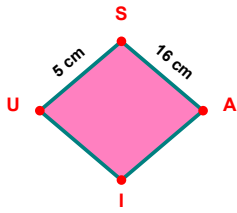
$|\ddot{C}L| - |BT| = \dots\dots\dots$



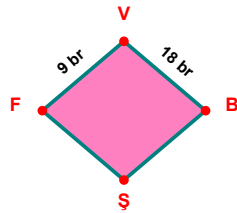
$|\ddot{D}L| - |FE| = \dots\dots\dots$



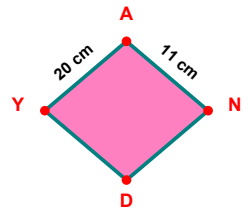
$|LM| - |EL| = \dots\dots\dots$



$|SA| - |US| = \dots\dots\dots$



$|VB| - |FV| = \dots\dots\dots$



$|YA| - |AN| = \dots\dots\dots$

SÜREÇ ODAKLI DEĞERLENDİRME ÖLÇEĞİ

Doğru Sayısı: / 24

Öğretmen ilgili kutucuğu işaretler.

Geliştirilmeli (0-8)

İyi (9-14)

Çok İyi (15-20)

Mükemmel (21-24)

☐☐☐☐

Hazırlayan:

Bu bölüme sınıfınızın ilgili kazanıma yönelik genel durumuna ilişkin gözlem ve izlenimlerinizi, öğrencilerinizin bu kazanımla ilgili öğrenme eksikliklerini ve bu eksikliklerin giderilmesi amacıyla yaptığınız/yapmayı planladığınız faaliyetleri not edebilirsiniz.

No	Adı - Soyadı	Toplam Puan	Değerlendirme
1			
2			
3			
4			
5			
6			
7			
8			
9			
10			
11			
12			
13			
14			
15			
16			
17			
18			
19			
20			
21			
22			
23			
24			
25			
26			
27			
28			
29			
30			
31			
32			
33			
34			
35			

Hazırlayan: